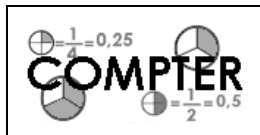


Prénom : .....

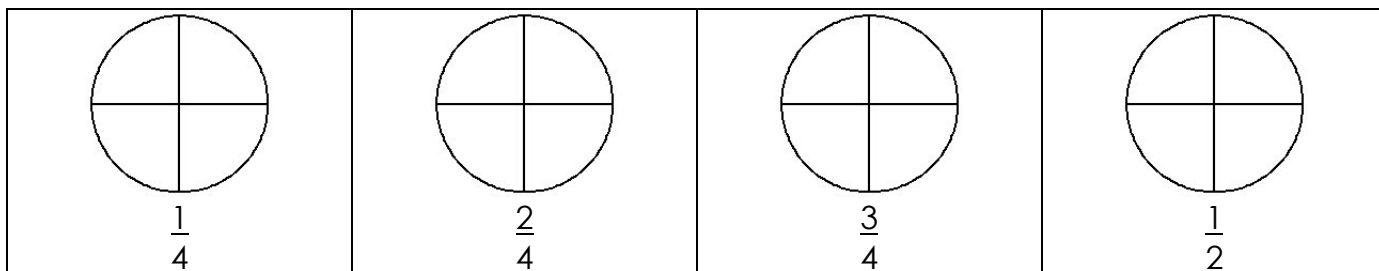
Date : .....



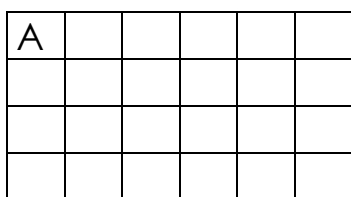
# NUMÉRATION

## Les fractions (01)

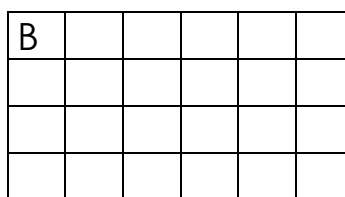
1./ Colorie la partie demandée de chacune de ces figures :



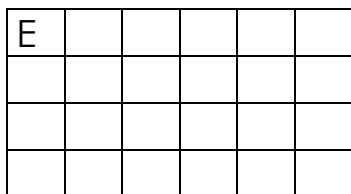
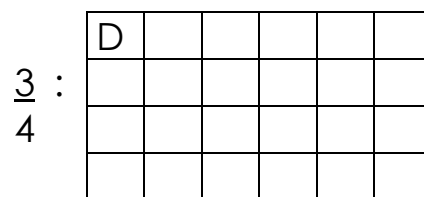
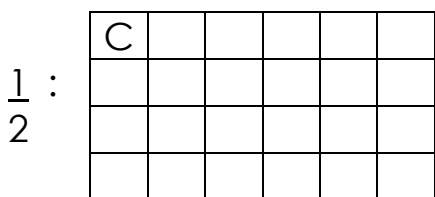
2./ Colorie la partie demandée de chacune de ces figures :



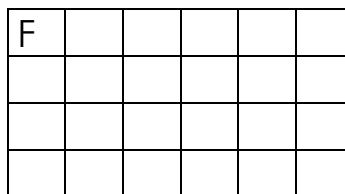
:  $\frac{1}{4}$



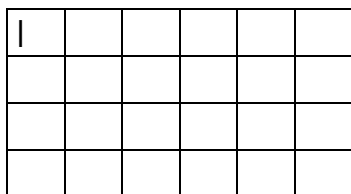
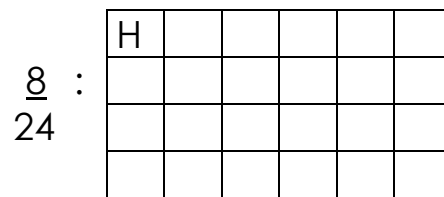

:  $\frac{1}{3}$



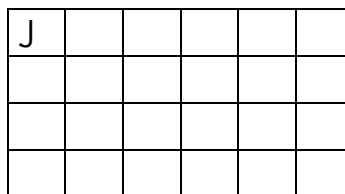
:  $\frac{2}{3}$



:  $\frac{16}{24}$



:  $\frac{18}{24}$



:  $\frac{12}{24}$

- Parmi les figures rectangulaires (A à J), quelles sont celles pour lesquelles tu as colorié la même surface (le même nombre de petits carreaux) ?  
A ton avis pourquoi ?

<p>.....</p> <p>.....</p>	<p>.....</p> <p>.....</p>
---------------------------	---------------------------